

NAMAGUNGA PRIMARY BOARDING SCHOOL
BEGINNING OF TERM III EXAMINATION - 2022
SOCIAL STUDIES WITH RELIGIOUS EDUCATION

PRIMARY SIX

Time allowed: 2 Hours 15 Minutes

Name: **Stream:**

DO NOT OPEN THIS BOOKLET UNTIL YOU ARE TOLD TO DO SO

Read the following instructions carefully:

1. This paper has **two** Sections: **A** and **B**.
2. Section **A**, has **40** questions (40 marks)
3. Section **B** has **15** questions (60 marks).
4. Answer **ALL** questions: All answers to both Sections **A** and **B** must be written in spaces provided in full sentences.
5. All answers must be written using a blue or black ballpoint pen or ink but not pencil. All work done in pencil except diagrams will **NOT** be marked.
6. Unnecessary alteration of work will lead to loss of marks.
7. Any handwriting that cannot be easily read, may lead to loss marks.

FOR EXAMINERS' USE		
ONLY		
QN. NO.	MARK	SIGN
1-10		
11-20		
21-30		
31-40		
41-43		
44-46		
47-49		
50-52		
53-55		
TOTAL		

SECTION A

1. Name the imaginary line that divides the earth into the Northern and Southern hemispheres.

2. Which group of people introduced rupee as a form of currency?


3. Mention the neighbour to East ^{Africa} in the South.

4. In which way are agro-based industries important to farmers?

5. How can security promote trade in an area?

6. Write any one economic effect of the collapse of the East African Community.

7. Why was the 1900 Buganda Agreement signed by the regents?

8. Draw a map symbol for a quarry.

9. Mention any one problem facing the fishing industry.

10. Why did the IBEACo fail to run its activities in E.A? .

11. Which group of people led to the final collapse of the Chwezi?

12. How is vegetation useful to a herbalist?

13. Give one way children's rights are abused today.
-
14. How was LEGCO useful to the colonial government in Uganda?
-
15. Why is land considered to be the most important resource?
-
16. Give any one role of a child in a home.
-
17. How can the government help the nomadic pastoral tribes to live a settled life?
-
18. Why is swamp drainage regarded as a bad practice?
-
19. Why is 9th October celebrated in Uganda every year?
-
20. How do farmers benefit from phosphates?
-
21. Give any one source of funds used in a school.
-
22. In which one way does the Uganda Red Cross Society help people affected by disasters?
-
23. State the role that was played by the Royal Geographical Society to explorers.
-
24. Mention any one cause of rural-urban migration.
-
25. Give any one way of promoting peace and security in your school.
-

26. What does this symbol stand for on a map?



27. Name the place which is believed to be the cradle land for the Bantu.

28. Mention one way the government of Uganda promotes decentralization.

29. Why is tourism referred to as an industry?

30. How is fire brigade section of police useful in a community?

31. Give any one reason why people keep animals in their homes.

32. Mention one traditional method of preserving fish.

33. How did the size of Bunyoro Kitara empire lead to its collapse?

34. Why does River Nile flow northwards?

35. Give any one reason why people carry out poaching.

For questions 36 – 40 answer **Either** Christianity or **Islam** but not both in a number.

36. **Either** :

Mention one holy place where Christians go for prayers.

OR:

Mention one holy place where Muslims go for prayers.

37. **Either:**

Give one way of maintaining good relationship among Christians.

OR:

Give one way of maintaining good relationship among Muslims.

38. **Either:**

Name the son of Adam and Eve who killed his brother.

OR:

Name the son of Adam and Hawa who killed his brother.

39. **Either:**

What is lent?

OR:

What is Ramadhan?

40. **Either:**

How did Abraham show his faith in God?

OR:

How did Prophet Ibrahim show faith to Allah?

SECTION B (40 marks)

41(a) State two importance of mining in East Africa.

- i) _____
- ii) _____

(b) Write any two disadvantages of mining in an area.

- i) _____
- ii) _____

42(a) Mention any two factors that affect vegetation distribution negatively.

i) _____

ii) _____

(b) How do the following groups of people benefit from vegetation?

i) carpenters

ii) builders

43(a) What is indiscriminate fishing?

b) Give two dangers of water hyacinth to the fishing industry.

i) _____

ii) _____

c) State any one way of controlling water hyacinth.

44(a) Write any one symbol of Uganda as an independent nation.

b) Who designed the Uganda National flag?

c) When is the National flag flown at half mast.

d) Which colour of the Uganda a flag signifies the African people?

45a) What is population growth?

b) Mention any two factors that influence population distribution of an area.

i) _____

ii) _____

c) Why does the government conduct population census?

46 a) Give one reason why missionaries came to Uganda?

b) State any two problems missionaries faced in Uganda.

i) _____

ii) _____

c) Give any one contribution of missionaries to Uganda.

47. **Fill in the blanks correctly.**

Community	Title of the river
a) _____	Rwot
b) Nyamwezi	_____
c) _____	Nabongo
d) Alur	_____

48(a) State two reasons why the East African Community was revived.

(i) _____

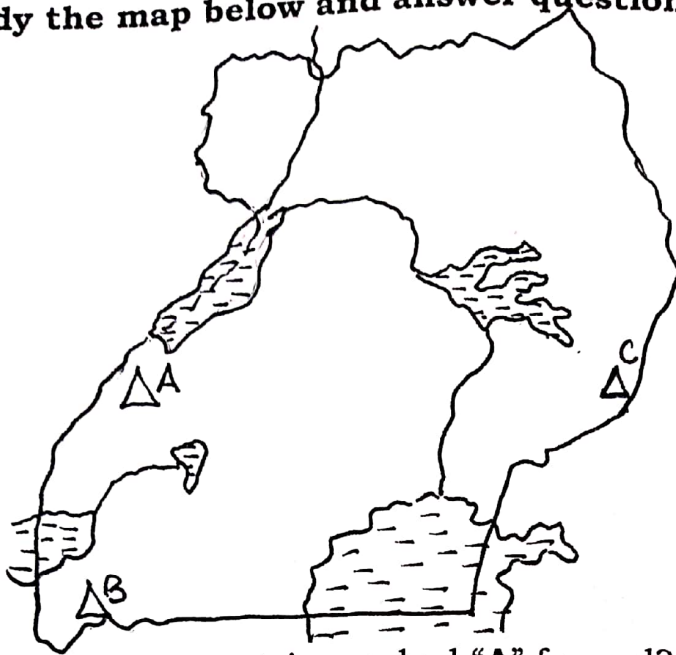
(ii) _____

b) Which organ of the revived East African Community does the following roles;

i) Making laws for the EAC _____

ii) Hearing appeal cases from member states -

49. Study the map below and answer questions that follow;



(a) How was mountain marked "A" formed?

(b) Name the highest peak of mountain marked B.

(c) Name the highland Bantu tribe found around mountain marked C.

(d) Why does arabica coffee grow well around the slopes of mountain marked C?

50. Name the road signs below.


a



b



c



d



For questions 51 – 55, answer either **Christianity** or **Islamic** question in a number but **NOT BOTH**.

51a) Mention any two ways God created man different from other creatures.

(i) _____

(ii) _____

b) Give any two reasons why God made man the summit of creation.

(i) _____

(ii) _____

OR:

a) Mention any two ways Allah created man different from other creatures.

(i) _____

(ii) _____

b) Give any two reasons why Allah made man the summit of creation.

i) _____

ii) _____

52. **Either:**

a) State two ways in which you can use your talents responsibly according to the Bible.

(i) _____

(ii) _____

b) Mention two ways in which people misuse their talents.

(i) _____

(ii) _____

OR:

a) State two ways in which you can use your talents responsibly.

(i) _____

(ii) _____

b) State any two ways people misuse their talents.

(i) _____

(ii) _____

53. Either:

- a) Write down any two selfless activities to people in your community today.

(i) _____

(ii) _____

- b) Mention any two ways you as a child can benefit from the selfless activities done.

(i) _____

(ii) _____

OR:

- a) State any two selfless activities Moslem children can do in their communities.

(i) _____

(ii) _____

- b) Give any two ways Muslim children can benefit from such services.

(i) _____

(ii) _____

54. Either :

- a) How did the following people show their faith in ^{God?}~~Allah~~.

(i) Mary the mother of Jesus

(ii) Abraham

- b) Give any two ways Christians in the world show faith in God today.

(i) _____

(ii) _____

OR:

- a) How did the following people show faith in ^{Allah?}~~God~~?

(i) prophet Nuhu

(ii) prophet Muhammed

b) State any two ways in which Muslims in the world show faith in Allah today.

(i) _____

(ii) _____

55. **EITHER:**

a) Mention any two examples of prayers in Christianity.

(i) _____

(ii) _____

b) Give any two reasons why Christians pray to God.

(i) _____

(ii) _____

OR:

a) Mention two types of prayers in Islam.

(i) _____

(ii) _____

b) Give any two reasons why Muslims pray.

(i) _____

(ii) _____

END